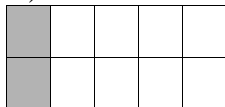
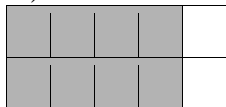


1. Which picture represents $\frac{1}{5}$?

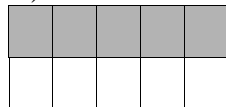
a.)




b.)



c.)

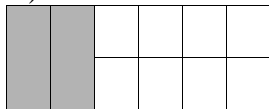


d.)

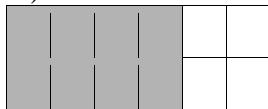


2. Which picture represents $\frac{3}{4}$?

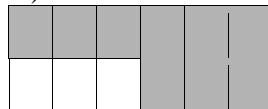
a.)




b.)



c.)

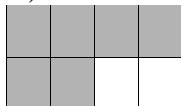


d.)

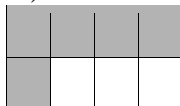


3. Which picture represents 25%?


a.)




b.)



c.)

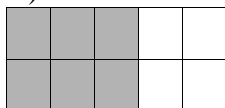


d.)




4. Which picture represents 0.6?


a.)




b.)



c.)




d.)




5. Which picture represents 80%?

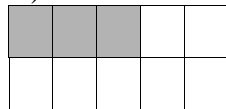
a.)




b.)



c.)

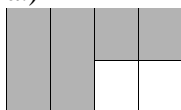


d.)

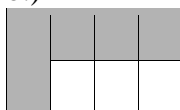


6. Which picture represents 0.75?

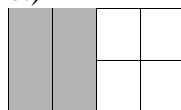
a.)



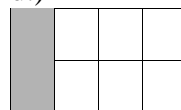
b.)



c.)

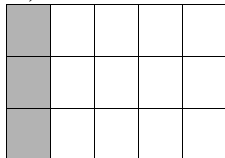


d.)

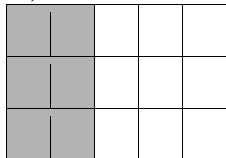


7. Which picture represents $\frac{8}{10}$?

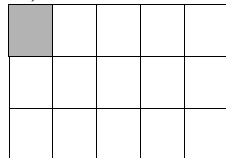
a.)




b.)



c.)

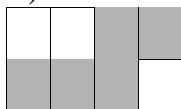


d.)

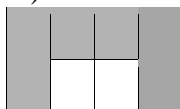


8. Which picture represents $\frac{12}{16}$?


a.)




b.)



c.)

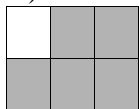


d.)

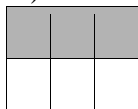


9. Which picture represents $\frac{4}{12}$?

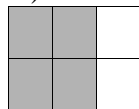
a.)



b.)



c.)



d.)

